

CHEMISTRY
MODEL QUESTIONS

Choose the correct answer for each question.

1. How many atoms are there in one mole of CH_3OH ?

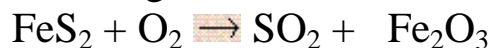
- A. 6 atoms
- B. 6.0×10^{23} atoms
- C. 12.0×10^{23} atoms
- D. 3.6×10^{24} atoms

2. $\text{NH}_3 + \text{O}_2 \rightarrow \text{NO}_2 + \text{H}_2\text{O}$

Balance the equation given above. Then, find the number of moles of oxygen gas O_2 involved in the reaction.

- A. 1 mole
- B. 3 moles
- C. 4 moles
- D. 7 moles

3. When iron pyrite (FeS_2) is heated in air, the process is known as "roasting". It forms sulfur dioxide and iron (III) oxide as follows:



Balance the given equation, **and then**, choose the correct choice of the number of moles for the reactants and products.

- A. 4, 2, 8, 7 respectively
- B. 2, 4, 7, 8 respectively
- C. 2, 11, 7, 8 respectively
- D. 4, 11, 8, 2 respectively

4. Doctors recommend taking vitamin (C) in winter days, How many moles of Vitamin C, ($\text{C}_6\text{H}_8\text{O}_6$), are there in 528 g of Vitamin C? given that: (C = 12 , H = 1 , O = 16)

- A. 2 moles
- B. 2,75 moles
- C. 4 moles
- D. 5 moles

CHEMISTRY
MODEL QUESTIONS

5. Which one of the following will turn red litmus solution into blue?

- A. Vinegar
- B. Baking soda solution
- C. Orange juice
- D. Soft drinks

6. Calcium is one of the most important minerals the body needs in general, and teeth in particular, because it gives the texture and the external shape of the teeth, to bear the pressure on them. Acids are the main cause of loss of the outer enamel layer of the teeth. Repeated exposure to acids causes continuous wear of the enamel over time until the tooth loses its protective layer completely and becomes vulnerable to damage.

According to this, calcium phosphate (CaHPO_4) which is present in tooth enamel is:

- A. Basic
- B. Amphoteric
- C. Acidic
- D. Neutral

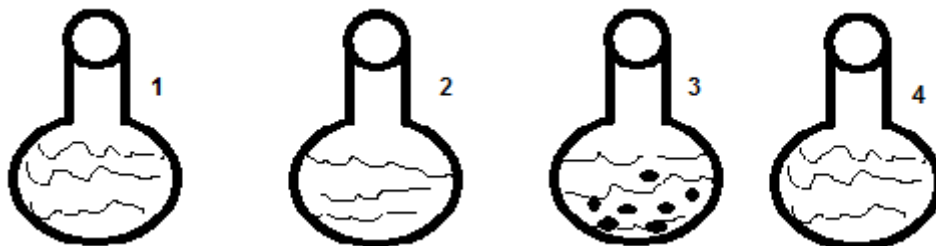
7. Which acid of the following does not form an acidic salt?

- A. Phosphoric acid
- B. Carbonic acid
- C. Hydrochloric acid
- D. Sulphuric acid

CHEMISTRY
MODEL QUESTIONS

8. You have got four conical flasks, each of them contains 500 ml of water and an amount of sugar as follow:

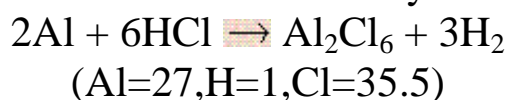
| flask 1 | flask 2 | flask 3 | flask 4 |
|---------|---------|---------|---------|
| 150g | 250g | 450 g | 0.5 g |



Which flask contains a saturated solution?

- A. Flask 1
- B. Flask 2
- C. Flask 3
- D. Flask 4

9. Calculate the mass of hydrogen formed when 25 grams of aluminum reacts with an excess amount of hydrochloric acid.



- A. 0.41 g
- B. 1.2 g
- C. 1.8 g
- D. 2.8 g

10. If 5.0 g of each reactant were used for the following process:
- $$2\text{KMnO}_4 + 5\text{Hg}_2\text{Cl}_2 + 16\text{HCl} \Rightarrow 10\text{HgCl}_2 + 2\text{MnCl}_2 + 2\text{KCl} + 8\text{H}_2\text{O}$$

The limiting reactant would be:

- A. KMnO_4
- B. HCl
- C. H_2O
- D. Hg_2Cl_2

CHEMISTRY
MODEL QUESTIONS

| | |
|------------|---|
| 11. | <p>In the equation: $\text{HF} + \text{H}_2\text{O} \rightleftharpoons \text{H}_3\text{O}^+ + \text{F}^-$</p> <p>A. H_2O is a base and HF is its conjugate acid. B. H_2O is an acid and HF is the conjugate base. C. HF is an acid and F^- is its conjugate base. D. HF is a base and H_3O^+ is its conjugate acid.</p> |
| 12. | <p>An ionic compound contains 29.08% sodium, 40.56% sulfur and 30.36% oxygen by mass. What is the formula of the sulfur – containing anion in the compound?</p> <p>A. $\text{S}_2\text{O}_3^{2-}$. B. $\text{S}_2\text{O}_4^{2-}$. C. $\text{S}_2\text{O}_5^{2-}$. D. $\text{S}_2\text{O}_6^{2-}$.</p> |
| 13. | <p>You have below five neutralization reactions between the acid-base pairs in dilute aqueous solutions:</p> <p>(1) $\text{CH}_3\text{COOH} + \text{NaOH} \rightleftharpoons$ (2) $\text{HNO}_3 + \text{Mg}(\text{OH})_2 \rightleftharpoons$ (3) $\text{H}_3\text{PO}_4 + \text{Ba}(\text{OH})_2 \rightleftharpoons$ (4) $\text{HCl} + \text{KOH} \rightleftharpoons$ (5) $\text{H}_2\text{CO}_3 + \text{LiOH} \rightleftharpoons$</p> <p>In which of these reactions, the net ionic equation is: $\text{H}^+ + \text{OH}^- \rightleftharpoons \text{H}_2\text{O}$?</p> <p>A. Reaction 2 only B. Reactions 1, 4 and 5 C. Reactions 2 and 3 D. Reaction 4 only</p> |
| 14. | <p>Which of the following equations represents the net ionic equation for the reaction of nitric acid with aluminum hydroxide?</p> <p>A. $3\text{H}^+ + \text{Al}(\text{OH})_{3(s)} \rightleftharpoons \text{Al}^{3+} + 3\text{H}_2\text{O}$ B. $3\text{HNO}_3 + \text{Al}(\text{OH})_{3(s)} \rightleftharpoons \text{Al}(\text{NO}_3)_3 + 3\text{H}_2\text{O}$ C. $\text{HNO}_3 + \text{OH}^- \rightleftharpoons \text{NO}_3^- + \text{H}_2\text{O}$ D. $\text{H}^+ + \text{OH}^- \rightleftharpoons \text{H}_2\text{O}$</p> |